



GREAT HEARTS WESTERN HILLS

A Great Hearts Academy

8702 Ingram Road | San Antonio, Tx 78251 | Office: (210) 888-9488 | Fax: (210) 888-9484 | www.greatheartswesternhills.org

Student Attendance Affidavit

My Western Hills student attended to his/her distance learning studies on the following days:

Monday, May 18, 2020

Tuesday, May 19, 2020

Wednesday, May 20, 2020

Thursday, May 21, 2020

Friday, May 22, 2020

For the sake of academic honesty, please help the students be accountable for doing the portions of the work that were designated as Independent work. If you notice that from the student's answers that they need some help better understanding the directions or the content, feel free to reteach or review the content or directions with your student before allowing them to make a second attempt. Reach out to your scholar's teacher via email if you need further assistance.

My scholar has completed the Review Packet to the best of his/her abilities and I have directed these assessments with my child's academic integrity in mind.

Parent Signature: _____

I have completed the Review Packet to the best of my abilities.

Student Signature: _____

Student Printed Name: _____ Class Section: _____

Fourth Grade Review Packet

Instructions: In place of new academic content this week, scholars will be completing a review packet which covers their core subject areas. This packet will consist of a 50 word spelling assessment, a cumulative math review, and writing tasks that will allow scholars to reflect on all that they have learned this year. You will also find helpful resources for essay-writing *at the very end of this packet*. Our goal is that students complete this packet as a celebration of the wonderful content they have learned thus far. We have planned for one subject per day, but your child may complete this packet in whatever order and at whatever pace he or she desires. We encourage scholars to do this work independently, and they may use their notes and prior work as resources. If your scholar needs additional assistance, please mark that you have provided help on their packet. By Saturday, May 23rd, please submit this entire packet, including the Attendance Affidavit, to your child's teacher.

Table of Contents

Assessments	pp. 3-9
Writing Resources	pp. 10-12

Monday - Spelling

Instructions: Please take your final 50 word spelling test. A recording of the words can be found on Google Classroom or in the most recent newsletter. Scholars have not practiced these words, and they increase in difficulty; however, they are not graded on accuracy. This assessment is simply used to measure their growth throughout the year.

1	18	35
2	19	36
3	20	37
4	21	38
5	22	39
6	23	40
7	24	41
8	25	42
9	26	43
10	27	44
11	28	45
12	29	46
13	30	47
14	31	48
15	32	49
16	33	50
17	34	

Tuesday - Math

Instructions: Please work slowly and carefully. Show your work.

1. Arrange the following in order, beginning with the greatest.
2 m 35 cm, 253 cm, 2 km, 20 m

2. In 58,270, the digit ____ is in the thousands place. The value of the digit 8 is _____.

3. In 48.52, the digit ____ is in the tenths place. The value of the digit 5 is _____.

4. Write 4 tens 6 tenths as a decimal.

5. What number is 0.1 more than 5.9?

6. What number is 2 more than -2?

***Hint: Draw a number line.

7. Write down **all** the factors of 20.

8. Write down **all** the common factors of 12 and 16.

9. Round 147.25 to 1 decimal place.

***Hint: 1 decimal place is the tenths place.

10. Which one of the following is the greatest?

4.2, 4.3, 4.23, 4.32

11. Which one of the following is the smallest?

$\frac{5}{4}$, $\frac{1}{2}$, $\frac{3}{4}$, $\frac{3}{8}$

***Hint: Draw fraction bars or find the common denominator to solve.

12. Write the missing number in each of the following.

(a) 3 h 4 min = _____

(b) 260 min = _____ h _____ min

13. Ms. Longoria bought 6 ft of lace. She used 1 ft 3 in. of lace for a dress.

She used 1 ft 8 in of lace for another dress.

How much lace did she have left? _____

14. Aron earned \$840 a month. He spent $\frac{2}{5}$ of it on food.

How much did he spend on food? _____

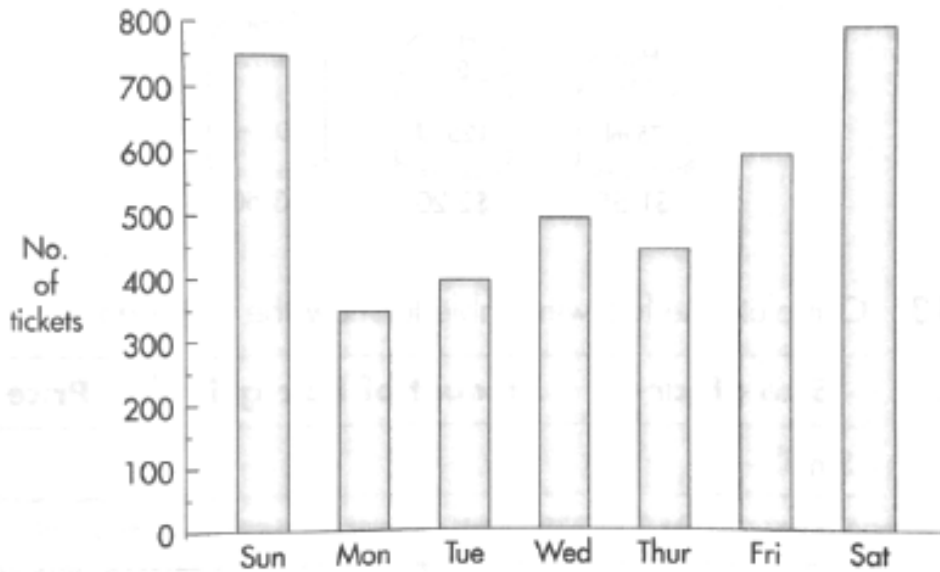
***Hint: Draw a bar model.

15. Ellen saved 15 quarters in January. She saved 35 nickels in February.

She saved 21 dimes in March.

How much money did she save in the three months? _____

16. The bar graph shows the number of tickets sold at a cinema in a week. Study the graph and answer the questions.



- What is the total number of tickets sold on Saturday and Sunday? _____
- How many tickets were sold from Monday to Friday? _____
- How many more tickets were sold on Friday than on Monday? _____

17. Find the unknown side and the perimeter of each of the following rectangles

$$A = l \times w \quad P = l + w + l + w \quad \text{or} \quad P = 2l + 2w$$

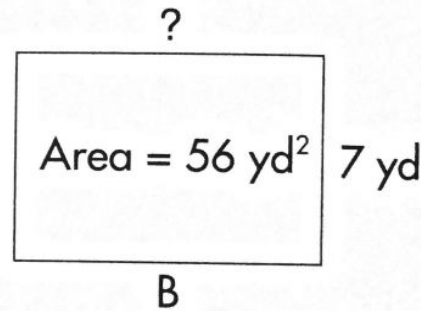
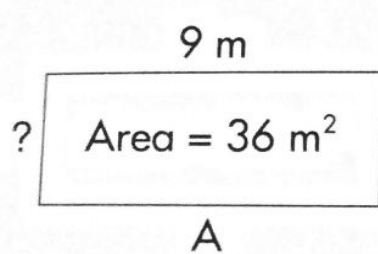
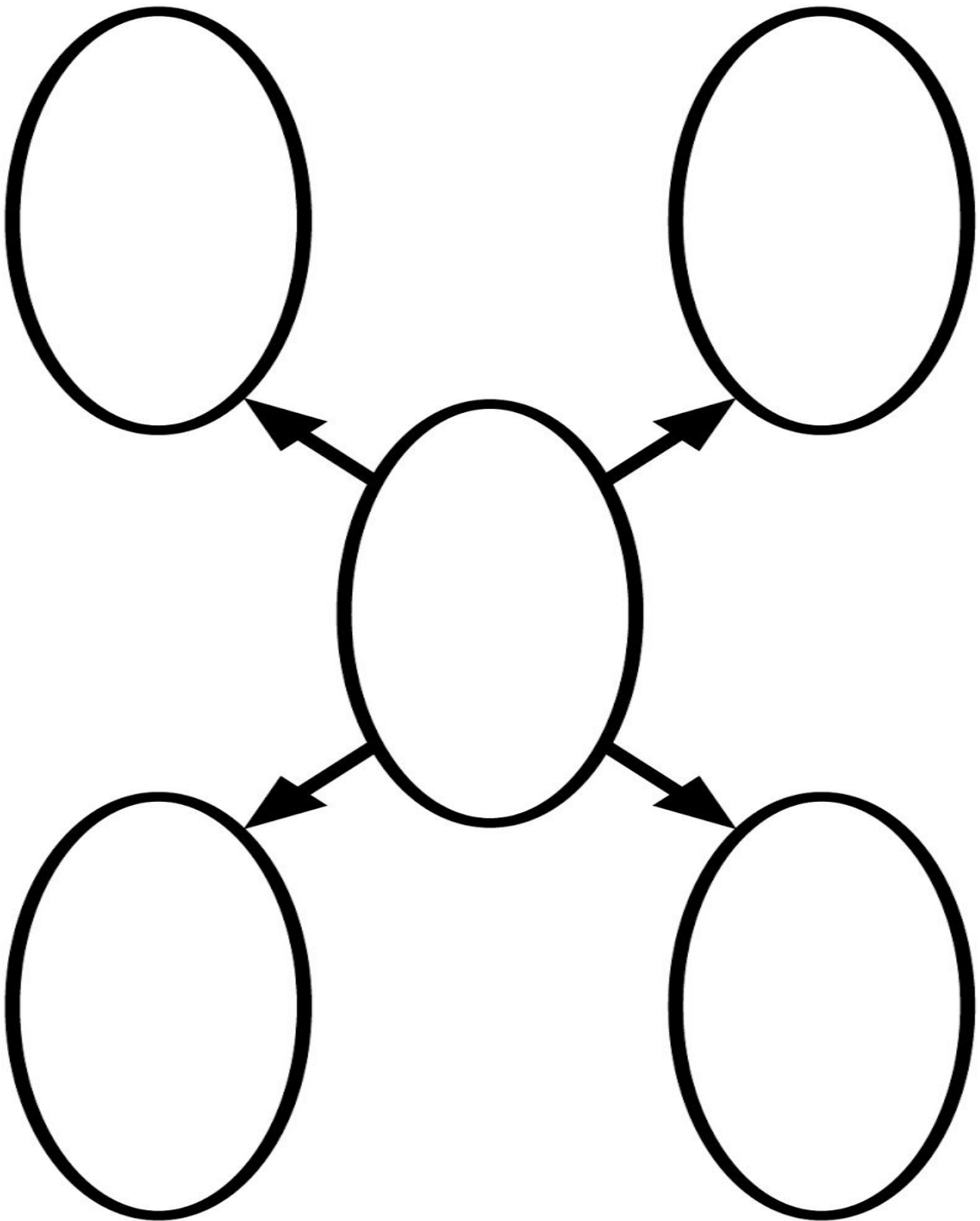


Figure	Area	Length	Width	Perimeter
A	36 m ²	9 m		
B	56 yd ²		7 yd	

Writing Resources

Concept Map Template



Key Word Outline Template

I. Topic Sentence 1: _____

1. Supporting Detail: _____

2. Supporting Detail: _____

3. Supporting Detail: _____

**Clincher: _____

Transition:

II. Topic Sentence 2: _____

1. Supporting Detail: _____

2. Supporting Detail: _____

3. Supporting Detail: _____

**Clincher: _____

Transition:

III. Topic Sentence 3: _____

1. Supporting Detail: _____

2. Supporting Detail: _____

3. Supporting Detail: _____

**Clincher: _____

Editing and Revising Checklist:

	Yes	No
1. Does the essay have three clear paragraphs?		
2. Is every paragraph indented?		
3. Does each paragraph have a topic sentence?		
4. Does each paragraph have a clincher?		
5. Does each paragraph use transition words? (first, next, then, etc.)		
6. Does the essay have a logical order? Is it well organized?		
7. Does the essay have interesting word choice?		
8. Does each sentence begin with a capital letter?		
9. Does each sentence end with proper punctuation?		
10. Are plurals and possessives correct?		
11. Do the sentence lengths vary (change)?		
12. Is there a quality adjective in every paragraph?		
13. Is there a strong verb in every paragraph?		
14. Is there an -ly adverb in every paragraph?		
15. Are quotation marks used correctly?		