



GREAT HEARTS WESTERN HILLS

A Great Hearts Academy

8702 Ingram Road | San Antonio, Tx 78251 | Office: (210) 888-9488 | Fax: (210) 888-9484 | www.greatheartswesternhills.org

Dear 3rd Grade Families,

We hope this message finds you and your family healthy, safe, and secure. Thank you so incredibly much for taking on your child's learning at home. We will do our best to support each scholar during this time and we are always available via email to answer questions, comments, or concerns you may have.

Please encourage your child to complete their work as diligently as possible. Parents, please take a look at your child's work a few times during the week. We encourage you to use the resources and videos found on Google Classroom to help with your child's studies.

The Assessment Packet is due on Saturday by 8:00pm to your scholar's teacher. If a photo is unable to be sent to the teacher, you may submit it on Monday during packet pick up.

Please use the links below to access your child's readings for Literature and History.

Online materials:

Alice in Wonderland - https://www.adobe.com/be_en/active-use/pdf/Alice_in_Wonderland.pdf

Earliest Americans - (Free Student Reader Download)

<https://www.coreknowledge.org/free-resource/ckhg-unit-4-earliest-americans/>

Again, please reach out to your child's teacher with any questions, concerns or comments. We are in this together!

Kindest Regards,

The Third Grade Team

P.S. We miss our scholars

Table of Contents

1. **Student Packet (printing is optional, can be viewed online and work can be completed on notebook paper) pgs 4-11**

2. ***Parent Packet (printing is optional, can be viewed online) pg 12***

3. ***Student Attendance Affidavit (Must be printed, signed and submitted with Assessments) (pg. 3)***



GREAT HEARTS WESTERN HILLS

A Great Hearts Academy

8702 Ingram Road | San Antonio, Tx 78251 | Office: (210) 888-9488 | Fax: (210) 888-9484 | www.greatheartswesternhills.org

Student Attendance Affidavit

My Western Hills student attended to his/her distance learning studies on the following days:

Monday, May 18, 2020

Tuesday, May 19, 2020

Wednesday, May 20, 2020

Thursday, May 21, 2020

Friday, May 22, 2020

For the sake of academic honesty, please help the students be accountable for doing the portions of the work that were designated as Independent work. If you notice that from the student's answers that they need some help better understanding the directions or the content, feel free to reteach or review the content or directions with your student before allowing them to make a second attempt. Reach out to your scholar's teacher via email if you need further assistance.

My scholar has completed Friday's Assessments to the best of his/her abilities and I have directed these assessments with my child's academic integrity in mind.

Parent Signature: _____

I have completed Friday's Assessments to the best of my abilities.

Student Signature: _____

Student Printed Name: _____ Class Section: _____

Spalding Review - Monday

Directions: You will complete a 50-word spelling assessment using the Spelling Assessment Video in Google Classroom. If you do not have access to the video, a parent will dictate the words to you. **Please go as far as you can.**

Name: _____ Date: _____ Class Section: _____

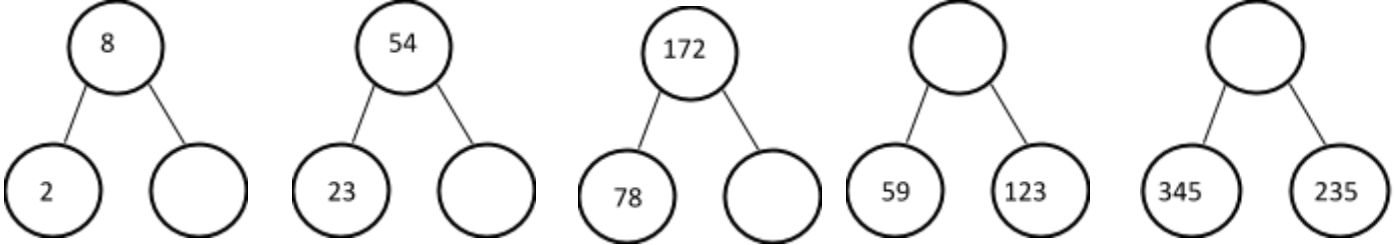
Spalding Spelling Assessment

1.	18.	35.
2.	19.	36.
3.	20.	37.
4.	21.	38.
5.	22.	39.
6.	23.	40.
7.	24.	41.
8.	25.	42.
9.	26.	43.
10.	27.	44.
11.	28.	45.
12.	29.	46.
13.	30.	47.
14.	31.	48.
15.	32.	49.
16.	33.	50.
17.	34.	

Math Review - Tuesday

Number bonds

Solve to find the missing number bond.



Place Value

Name the place value of the 8

846,537

37,628

47,836

36,585

362,846

Rounding

Round to the nearest tens

3,821 _____

4,444 _____

1,877 _____

Round to the nearest thousands

3,821 _____

4,444 _____

1,877 _____

Word Form

Write the following numbers in word form.

7

28

836

6,585

Number Form

Write the following numbers in number form

Thirty five
five

Six hundred and twenty three

seventeen

three thousand six hundred and fifty

Write the fractions in order, beginning with the smallest.

- (a) $\frac{5}{6}$, $\frac{2}{6}$, $\frac{3}{6}$ (b) $\frac{4}{9}$, $\frac{2}{3}$, $\frac{7}{9}$ (c) $\frac{3}{8}$, $\frac{3}{4}$, $\frac{1}{2}$

Fill in the blanks.

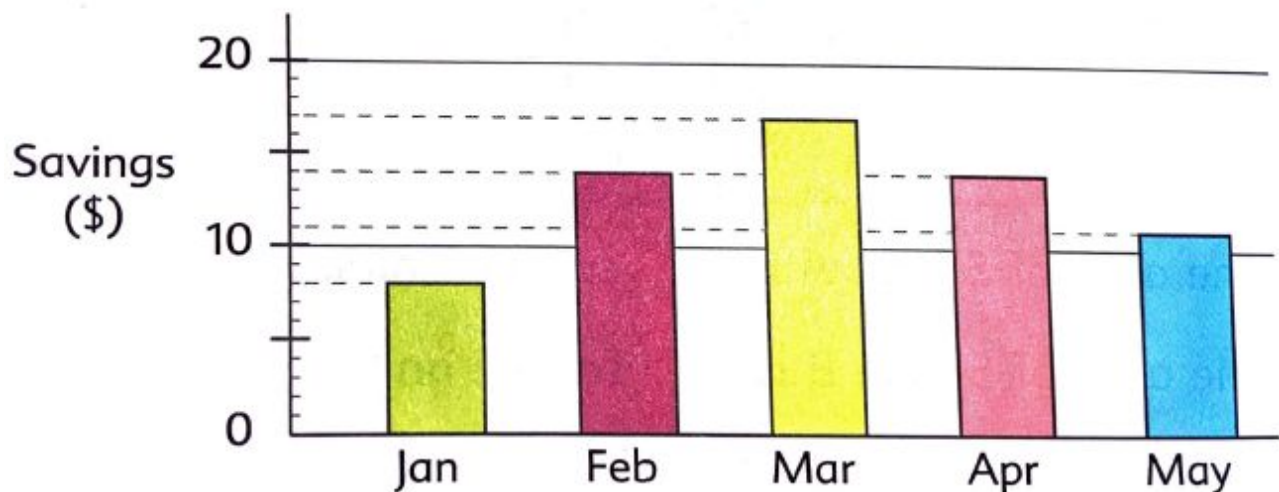
- (a) If ▲ stands for 5 people,

▲▲▲▲▲▲ stand for people.

- (b) If ■■■■ stand for 40 books,

each ■ stands for books.

This graph shows John's savings in five months.



- (a) How much did John save in January?
(b) In which month did he save the most?
(c) Find his total savings in the 5 months.

The total weight of 2 bags of sugar and one bag of flour is 4 lb 2 oz.
If the weight of each bag of sugar is 10 oz, find the weight of the bag of flour.

The length of a dining table is 5 ft 6 in.
The width of the table is half that of the length.
What is the width of the dining table in feet and inches?

Eric bought 7 cans of paint.
Each can contained 1 gal of paint.
He used 3 gal 1 qt of paint to paint his room.
How much paint was left?

Which container has the most water in it?

Container A	3 pt
Container B	1 qt
Container C	7 c
Container D	half-gal

Mrs. Jackson paid \$72 for some salmon.
The cost of the salmon was \$6 per pound.
How many pounds of salmon did Mrs. Jackson buy?

A bag of beans weighing 2 lb 7 oz was divided equally
into 3 portions.
What is the weight of each portion of beans in ounces?

A basket of oranges weighs 25 lb 3 oz.
The empty basket weighs 1 lb 4 oz.
What is the weight of the oranges?

A toy train is 19 in. long.
Write the length in feet and inches.

Arrange the following lengths in order. Start with
the longest.

String A	3 ft 1 in.
String B	29 in.
String C	2 ft 9 in.
String D	38 in.

The capacity of a tank is 18 gal.
How many quarts of water can it hold?

A blue ribbon is 5 ft 4 in. long.
A yellow ribbon is 2 ft 8 in. shorter.
What is the total length of the blue and yellow ribbons?

History Review - Wednesday

3rd Grade History Core Knowledge 2019 - 2020 Topics

Geography, Rivers, Canada	Ancient Rome	The Vikings
Early Americans	Exploration	


Directions: From all the History topics we have studied this year, choose your **favorite topic** and complete the following prompts. Be sure to respond with complete sentences! (**Independent**)

1. Favorite History Topic - _____

2. What are three things you learned about this History topic?

3. Why is this your favorite History Topic?

4. Create an illustration of your favorite History Topic.



Science Review - Thursday

Over the course of the year we have learned a lot in Science. Here are the topics we have studied:

- Animal Classification/Habitats
- Ecology
- Weather and Climate
 - Blizzards
 - Droughts
 - Tornadoes
 - Hurricanes
 - Thunderstorms
- Astronomy
 - Planets
 - Space Objects
 - Moon

3. What did the character learn at the end of the book?

4. Why is this character your favorite?

***We hope you enjoyed reading these classic books this school year,
be sure to keep reading this summer!***

For Parents:

Spalding Review - Monday

Directions: Student will complete a 50-word spelling assessment using the Spelling Assessment Video in Google Classroom.

If student does not have access to the video, use the list below. Say the word, read the example sentence, and then say the word again. **Please remind student to go only as far as he/she can.**